



EMEF DEZENOVE DE ABRIL.

ATIVIDADES REFERENTE A SEMANA 38: 01/12/2025 a 05/12/2025


COMPONENTE CURRICULAR: Matemática

TURMA: 71

PROFESSORA: Sheila Regina Tres

OBSERVAÇÕES: O planejamento das aulas poderá sofrer alterações conforme a necessidade do professor(a).


















































































































































Referência consultada: <https://br.pinterest.com/pin/464855992786614663/>



Nesta semana faremos uma avaliação de recuperação dos conteúdos trabalhados no trimestre.

→ Será entregue na aula uma atividade de revisão sobre equações do 1º grau.

MOSAICO ECUACIONES

	$2x + 1 = 23$		-5		-11		-10		-9		-8
	$4x - 3 = 17$		7		6		5		4		3
	$6x + 3 = 15$		2		1		0		1		2
	$3x + 30 = 0$		3		4		5		6		7
	$8x - 8 = -40$		8		9		10		11		12
	$-x + 1 = -7$										
	$2x + 2 = 4$										
	$2x + 8 = 16$										
	$-3x + 40 = 10$										
	$-x - 8 = 0$										
	$-9x - 35 = 10$										
	$-4x + 6 = -30$										
	$8x - 18 = 30$										
	$-x - 6 = 3$										
	$3x - 26 = 10$										
											
											
											
											
											
											
											
											
											
											
											

REYNALDO CARTOLIN R.

→ Equações do 1º grau com parênteses, explicação, exemplos e exercícios.